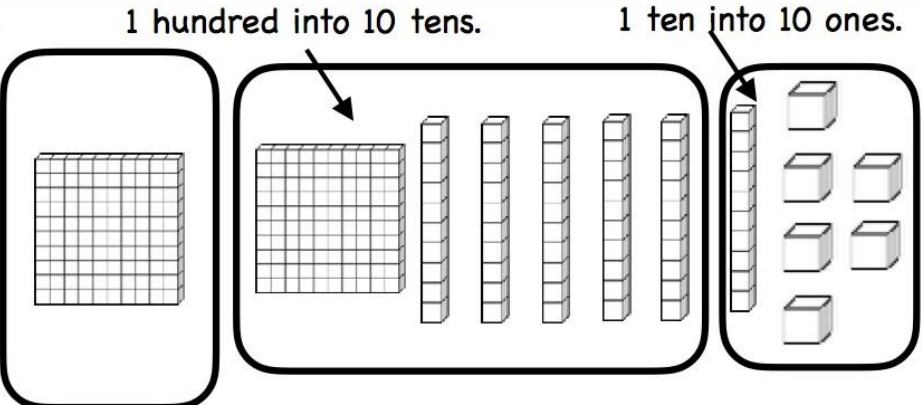
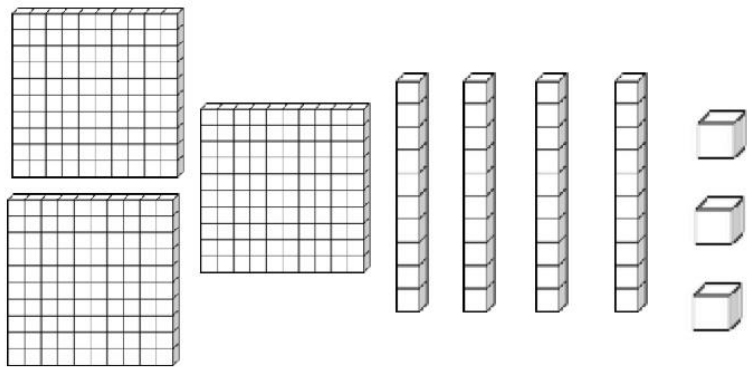


Directions: Circle the base ten blocks to show how you've regrouped then complete the subtraction problem.

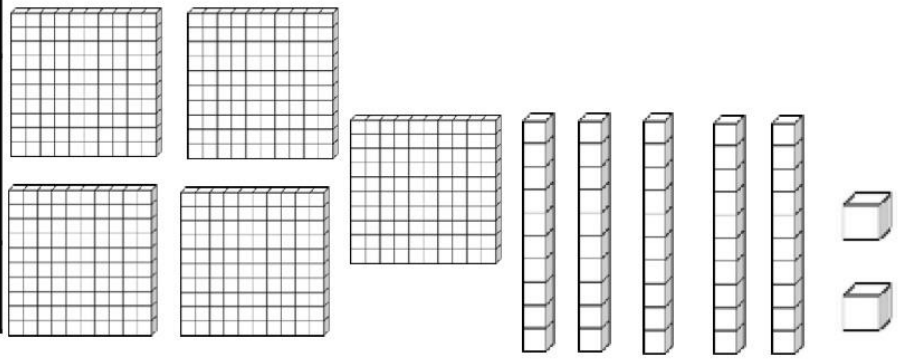
Hundreds	Tens	Ones
1	5	6
- 1	7	8
	8	8



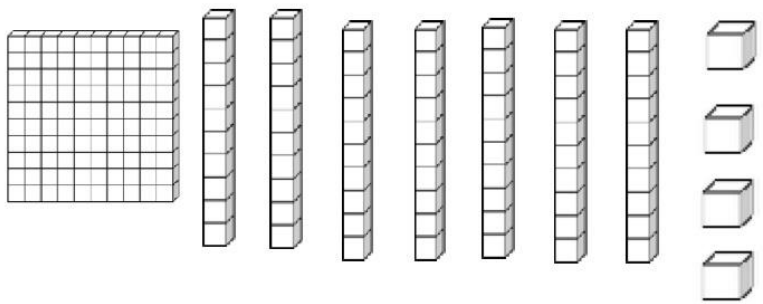
Hundreds	Tens	Ones
3	4	3
- 1	5	6



Hundreds	Tens	Ones
5	5	2
- 3	8	4



Hundreds	Tens	Ones
1	7	4
-	9	5



# Subtraction

$$\begin{array}{r} 926 \\ - 658 \\ \hline \end{array}$$

$$\begin{array}{r} 835 \\ - 368 \\ \hline \end{array}$$

$$\begin{array}{r} 956 \\ - 598 \\ \hline \end{array}$$

$$\begin{array}{r} 923 \\ - 567 \\ \hline \end{array}$$

$$\begin{array}{r} 753 \\ - 378 \\ \hline \end{array}$$

$$\begin{array}{r} 823 \\ - 386 \\ \hline \end{array}$$

$$\begin{array}{r} 925 \\ - 568 \\ \hline \end{array}$$

$$\begin{array}{r} 953 \\ - 368 \\ \hline \end{array}$$

$$\begin{array}{r} 763 \\ - 398 \\ \hline \end{array}$$

$$\begin{array}{r} 932 \\ - 778 \\ \hline \end{array}$$

$$\begin{array}{r} 678 \\ - 593 \\ \hline \end{array}$$

$$\begin{array}{r} 836 \\ - 567 \\ \hline \end{array}$$