

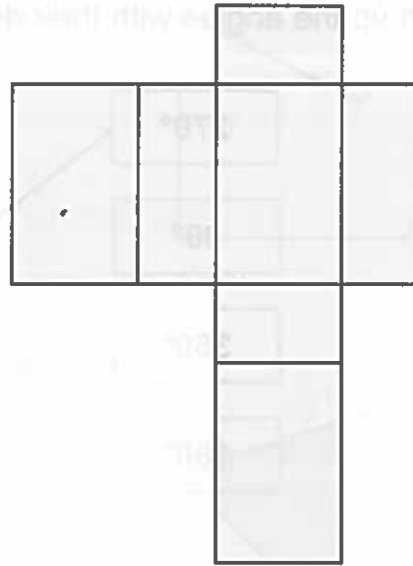
# 3D Shapes



4. This is a net for a cuboid.

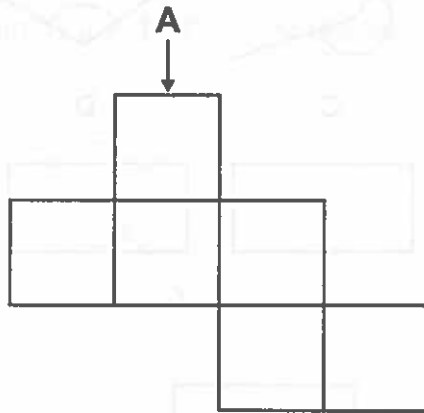
It has one extra face.

Cross out one face that could be removed.



5. The net shown here will make a cube when folded together.

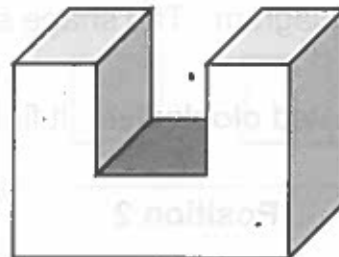
Draw an arrow pointing to the edge which will join to the edge labelled A.



6. This shape is made by joining 3 cuboids.

How many faces does it have?

..... faces



A real Trimeasuretops is 3D. Are you good enough with 3D shapes to be a real Trimeasuretops? Tick the box.

